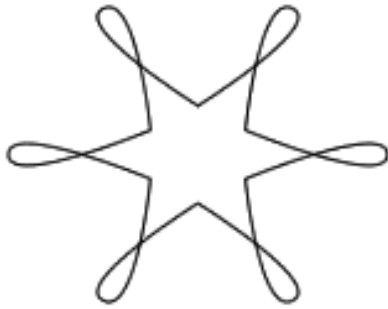
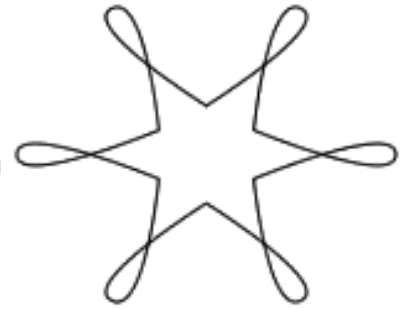


Fact Families

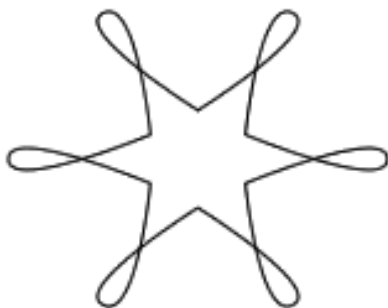


Roll two dice and write the numbers in the shapes. Use the two numbers on the boxes in each line. Fill in the rest of the blanks. Each line should be different.

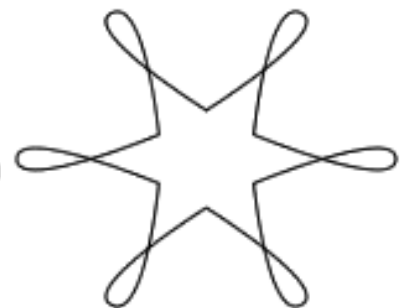


<input type="text"/>	\times	<input type="text"/>	$=$	<input type="text"/>
<input type="text"/>	\times	<input type="text"/>	$=$	<input type="text"/>
<input type="text"/>	\div	<input type="text"/>	$=$	<input type="text"/>
<input type="text"/>	\div	<input type="text"/>	$=$	<input type="text"/>

Fact Families



Roll two dice and write the numbers in the shapes. Use the two numbers on the boxes in each line. Fill in the rest of the blanks. Each line should be different.



<input type="text"/>	\times	<input type="text"/>	$=$	<input type="text"/>
<input type="text"/>	\times	<input type="text"/>	$=$	<input type="text"/>
<input type="text"/>	\div	<input type="text"/>	$=$	<input type="text"/>
<input type="text"/>	\div	<input type="text"/>	$=$	<input type="text"/>